

Drug Test Interpretation Quiz

Name _____ Date _____

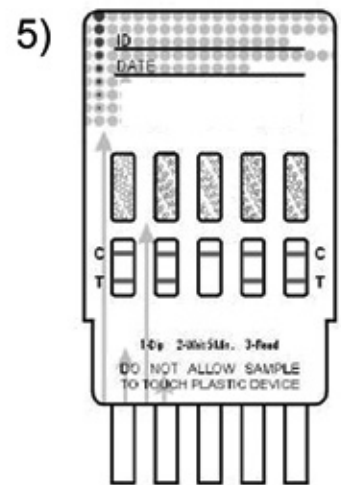
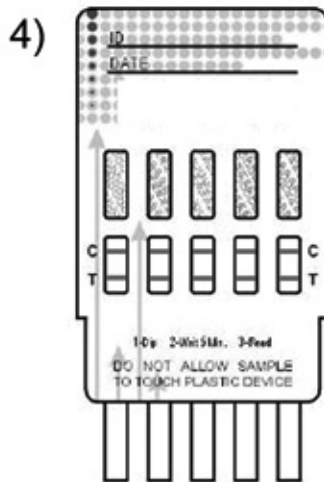
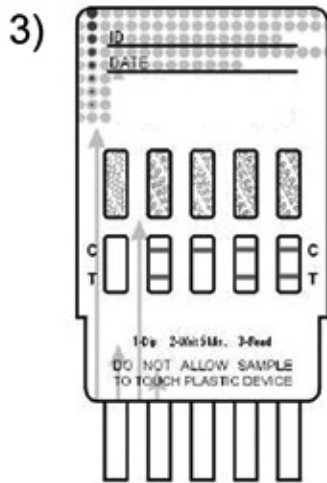
1) When collecting specimen in a cup, what should the temperature range be?

- a) 90-100 degrees Celsius
- b) 85-95 degrees Fahrenheit
- c) 90-100 degrees Fahrenheit
- d) 85-95 degrees Celsius

2) Matching: Match the correct drug name with its drug code.

- | | | |
|--------------------|-------|------|
| a. Marijuana | _____ | COC |
| b. Amphetamine | _____ | THC |
| c. Cocaine | _____ | mAMP |
| d. Opiates | _____ | PCP |
| e. Phencyclidine | _____ | AMP |
| f. Methamphetamine | _____ | OPI |

For questions 3-5 look at the pictures below. Based on what you were trained, decide what the results of the tests would be if you ran the test correctly, and waited the appropriate amount of time. Write the results below the test.



Fax Back To 888-340-4029
for training completion certificate

Company Name _____

Address _____

Phone # _____